

WORKING PARTY ON INLAND WATER TRANSPORT (SC.3)

SC.3 CEVNI Expert Group

Code: IWG\_RN/2019/6

Subject: Modules for CEVNI knowledge tests

Date: 8 June 2019

Author: Secretariat

**Proposal for the structure of [the catalogue of questions for the examination of the CEVNI knowledge] (Annex 1 to resolution No. 40)**

**I. GENERAL INFORMATION**

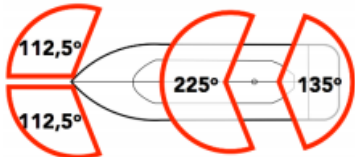
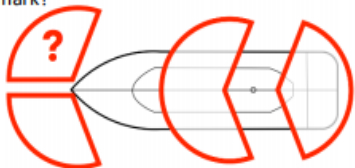
In accordance with annex I to resolution No. 40, "Requirements for the issue of an international certificate for operators of pleasure craft", for the issue of an ICC, the applicant must have the necessary competence for pleasure craft operation. For the issue of an ICC valid for inland waters, the competence shall include, among other subjects, the sufficient knowledge of the traffic regulations applicable on inland waters, in particular CEVNI (European Code for Inland Waterways). This knowledge shall be proved by passing an examination.

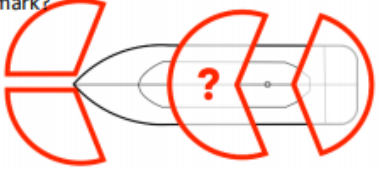
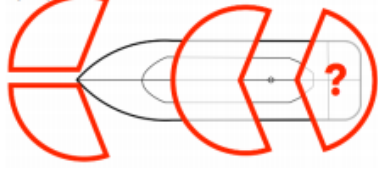

The Working Party on Inland Water Transport has drawn up a catalogue of questions for checking the sufficient knowledge of CEVNI for recreational boaters. Implementing governments which do not apply CEVNI on their territory and wish to issue ICC valid for inland waters to their nationals or residents, may choose multiple-choice questions from the catalogue for a theoretical examination, or develop their own tests of the CEVNI knowledge based on the catalogue.

The questions are taken from IWG\_RN/2019/3 kindly provided by ISSA.






**II. EXAMPLES OF QUESTIONS**










(the numbering system is proposed in the Guidelines on the use of the catalogue of questions for the examination of the CEVNI knowledge (...))








No.	Question	Reference to CEVNI							
<b>VISUAL SIGNALS (MARKING) ON VESSELS</b>									
05 03 01-01	<p>Are the lighting sectors of the yacht correctly marked in this drawing?</p> 	<table border="1"><tr><td>A</td><td>Yes</td></tr><tr><td>B</td><td>No, navigation lights (red and green) have a lighting sector of 135°</td></tr><tr><td>C</td><td>No, the engine light has a 360° lighting sector</td></tr></table>	A	Yes	B	No, navigation lights (red and green) have a lighting sector of 135°	C	No, the engine light has a 360° lighting sector	Article 3.01
A	Yes								
B	No, navigation lights (red and green) have a lighting sector of 135°								
C	No, the engine light has a 360° lighting sector								
05 03 01-02	<p>What color is the light indicated in the drawing with a question mark?</p> 	<table border="1"><tr><td>A</td><td>Red</td></tr><tr><td>B</td><td>Green</td></tr><tr><td>C</td><td>White</td></tr></table>	A	Red	B	Green	C	White	Article 3.01
A	Red								
B	Green								
C	White								



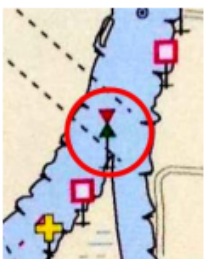





No.	Question		Reference to CEVNI							
05 03 01-03	What color is the light indicated in the drawing with a question mark?		<table border="1"> <tr><td>A</td><td>Red</td></tr> <tr><td>B</td><td>Green</td></tr> <tr><td>C</td><td>White</td></tr> </table>	A	Red	B	Green	C	White	Article 3.01
A	Red									
B	Green									
C	White									
05 03 01-04	What color is the light indicated in the drawing with a question mark?		<table border="1"> <tr><td>A</td><td>Red</td></tr> <tr><td>B</td><td>Green</td></tr> <tr><td>C</td><td>White</td></tr> </table>	A	Red	B	Green	C	White	Article 3.01
A	Red									
B	Green									
C	White									
05 03 04-01	You see a man on a nearby yacht waving his both arms towards you like in a drawing. What does it mean?		<table border="1"> <tr><td>A</td><td>He is greeting me</td></tr> <tr><td>B</td><td>He calls for help</td></tr> <tr><td>C</td><td>He is just exercising. It does not mean a thing</td></tr> </table>	A	He is greeting me	B	He calls for help	C	He is just exercising. It does not mean a thing	Article 3.30
A	He is greeting me									
B	He calls for help									
C	He is just exercising. It does not mean a thing									









WATERWAY SIGNS

05 05 01-01	What is this sign?		<table border="1"> <tr><td>A</td><td>Watch for water skiers</td></tr> <tr><td>B</td><td>Water skiing prohibited</td></tr> <tr><td>C</td><td>Water sports prohibited</td></tr> </table>	A	Watch for water skiers	B	Water skiing prohibited	C	Water sports prohibited	Annex 7, A.14
A	Watch for water skiers									
B	Water skiing prohibited									
C	Water sports prohibited									
05 05 01-02	What is this sign?		<table border="1"> <tr><td>A</td><td>Attention, danger</td></tr> <tr><td>B</td><td>No entry</td></tr> <tr><td>C</td><td>The left side of the navigable route</td></tr> </table>	A	Attention, danger	B	No entry	C	The left side of the navigable route	A.1a Annex 7
A	Attention, danger									
B	No entry									
C	The left side of the navigable route									
05 05 01-03	What is this sign?		<table border="1"> <tr><td>A</td><td>Stick to the left bank</td></tr> <tr><td>B</td><td>Request for passing or overtaking</td></tr> <tr><td>C</td><td>No passing or overtaking</td></tr> </table>	A	Stick to the left bank	B	Request for passing or overtaking	C	No passing or overtaking	A.4 Annex 7
A	Stick to the left bank									
B	Request for passing or overtaking									
C	No passing or overtaking									
05 05 01-04	What is this sign?		<table border="1"> <tr><td>A</td><td>Paid berthing</td></tr> </table>	A	Paid berthing	A.5 Annex 7				
A	Paid berthing									
05 05 01-05	What does the symbols mark in red on the map mean?		<table border="1"> <tr><td>A</td><td>Customs</td></tr> <tr><td>B</td><td>Sluice</td></tr> <tr><td>C</td><td>No entry</td></tr> </table>	A	Customs	B	Sluice	C	No entry	
A	Customs									
B	Sluice									
C	No entry									

No.	Question		Reference to CEVNI							
05 05 01-05	You approach a sluice and you see these lights. What do they mean?		<table border="1"> <tr> <td>A</td> <td>The sluice is closed, but it will be open soon</td> </tr> <tr> <td>B</td> <td>The sluice is permanently closed</td> </tr> <tr> <td>C</td> <td>The sluice is open, you can go in</td> </tr> </table>	A	The sluice is closed, but it will be open soon	B	The sluice is permanently closed	C	The sluice is open, you can go in	A.11b Articles 6.26 and 6.28 bis Annex 7
A	The sluice is closed, but it will be open soon									
B	The sluice is permanently closed									
C	The sluice is open, you can go in									
05 05 01-06	You approach a sluice and you see these lights. What do they mean?		<table border="1"> <tr> <td>A</td> <td>The sluice is closed, but it will be open soon</td> </tr> <tr> <td>B</td> <td>The sluice is permanently closed</td> </tr> <tr> <td>C</td> <td>The sluice is open, you can go in</td> </tr> </table>	A	The sluice is closed, but it will be open soon	B	The sluice is permanently closed	C	The sluice is open, you can go in	A.1b Articles 3.25, paragraph 2 (b), 6.08, 6.16, 6.22, 6.22 bis, 6.25, 6.26, 6.27 and 6.28 bis) Annex 7
A	The sluice is closed, but it will be open soon									
B	The sluice is permanently closed									
C	The sluice is open, you can go in									
05 05 03-01	What is this sign?		<table border="1"> <tr> <td>A</td> <td>Bifurcation of the fairway in 75m</td> </tr> <tr> <td>B</td> <td>Speed limit to 7,5 knots</td> </tr> <tr> <td>C</td> <td>Headroom limited to 7,5m</td> </tr> </table>	A	Bifurcation of the fairway in 75m	B	Speed limit to 7,5 knots	C	Headroom limited to 7,5m	C.2b Annex 7
A	Bifurcation of the fairway in 75m									
B	Speed limit to 7,5 knots									
C	Headroom limited to 7,5m									
05 05 03-02	What is this sign?		<table border="1"> <tr> <td>A</td> <td>Attention, change of priority in 45m</td> </tr> <tr> <td>B</td> <td>Width of passage or channel limited to 45m</td> </tr> <tr> <td>C</td> <td>Speed limit to 45 km/h</td> </tr> </table>	A	Attention, change of priority in 45m	B	Width of passage or channel limited to 45m	C	Speed limit to 45 km/h	C.3b Annex 7
A	Attention, change of priority in 45m									
B	Width of passage or channel limited to 45m									
C	Speed limit to 45 km/h									
05 05 03-03	What is this sign?		<table border="1"> <tr> <td>A</td> <td>Channel near the left bank</td> </tr> <tr> <td>B</td> <td>Channel near the right bank</td> </tr> <tr> <td>C</td> <td>No entry</td> </tr> </table>	A	Channel near the left bank	B	Channel near the right bank	C	No entry	C.4 Annex 7
A	Channel near the left bank									
B	Channel near the right bank									
C	No entry									
05 05 05-01	What is this sign?		<table border="1"> <tr> <td>A</td> <td>Water skiing permitted</td> </tr> <tr> <td>B</td> <td>Water skiing prohibited</td> </tr> <tr> <td>C</td> <td>Watch for water skiers</td> </tr> </table>	A	Water skiing permitted	B	Water skiing prohibited	C	Watch for water skiers	E.17 Annex 7
A	Water skiing permitted									
B	Water skiing prohibited									
C	Watch for water skiers									
05 05 05-02	You approach a sluice and you see these lights. What do they mean?		<table border="1"> <tr> <td>A</td> <td>The sluice is closed, but it will be open soon</td> </tr> <tr> <td>B</td> <td>The sluice is permanently closed</td> </tr> <tr> <td>C</td> <td>The sluice is open, you can go in</td> </tr> </table>	A	The sluice is closed, but it will be open soon	B	The sluice is permanently closed	C	The sluice is open, you can go in	E.1d Articles 6.08, 6.16, 6.26, 6.27 and 6.28 bis Annex 7
A	The sluice is closed, but it will be open soon									
B	The sluice is permanently closed									
C	The sluice is open, you can go in									
05 05 05-03	What is this sign?		<table border="1"> <tr> <td>A</td> <td>Harbor</td> </tr> <tr> <td>B</td> <td>Ferry-boat moving independently</td> </tr> <tr> <td>C</td> <td>Ferry-boat moving NOT independently</td> </tr> </table>	A	Harbor	B	Ferry-boat moving independently	C	Ferry-boat moving NOT independently	E.4b Annex 7
A	Harbor									
B	Ferry-boat moving independently									
C	Ferry-boat moving NOT independently									
05 05 05-04	What is this sign?		<table border="1"> <tr> <td>A</td> <td>Footbridge in a close distance</td> </tr> <tr> <td>B</td> <td>Weir in close distance</td> </tr> <tr> <td>C</td> <td>Ferry-boat moving NOT independently</td> </tr> </table>	A	Footbridge in a close distance	B	Weir in close distance	C	Ferry-boat moving NOT independently	E.3 Annex 7
A	Footbridge in a close distance									
B	Weir in close distance									
C	Ferry-boat moving NOT independently									

No.	Question		Reference to CEVNI							
05 05 05-05	What is this sign?		<table border="1"> <tr> <td><b>A</b></td> <td>End of a prohibition or obligation applying to traffic in one direction only, or end of a restriction</td> </tr> <tr> <td><b>B</b></td> <td>Intersection of fairways in close proximity</td> </tr> <tr> <td><b>C</b></td> <td>Note sluice - difference in water level</td> </tr> </table>	<b>A</b>	End of a prohibition or obligation applying to traffic in one direction only, or end of a restriction	<b>B</b>	Intersection of fairways in close proximity	<b>C</b>	Note sluice - difference in water level	E.11 Annex 7
<b>A</b>	End of a prohibition or obligation applying to traffic in one direction only, or end of a restriction									
<b>B</b>	Intersection of fairways in close proximity									
<b>C</b>	Note sluice - difference in water level									
05 05 05-06	What is this sign?		<table border="1"> <tr> <td><b>A</b></td> <td>No anchoring</td> </tr> <tr> <td><b>B</b></td> <td>Order to anchor</td> </tr> <tr> <td><b>C</b></td> <td>Anchoring</td> </tr> </table>	<b>A</b>	No anchoring	<b>B</b>	Order to anchor	<b>C</b>	Anchoring	E.6 Articles 6.18(2) and 7.03(2) Annex 7
<b>A</b>	No anchoring									
<b>B</b>	Order to anchor									
<b>C</b>	Anchoring									
05 05 05-07	What is this sign?		<table border="1"> <tr> <td><b>A</b></td> <td>Making fast to the bank permitted on the side of the waterway on which the sign is placed</td> </tr> <tr> <td><b>B</b></td> <td>Obligation to making fast to the bank on the side of the waterway on which the sign is placed</td> </tr> <tr> <td><b>C</b></td> <td>Making fast to the bank prohibited on the side of the waterway on which the sign is placed</td> </tr> </table>	<b>A</b>	Making fast to the bank permitted on the side of the waterway on which the sign is placed	<b>B</b>	Obligation to making fast to the bank on the side of the waterway on which the sign is placed	<b>C</b>	Making fast to the bank prohibited on the side of the waterway on which the sign is placed	E.7 Article 7.04(2) Annex 7
<b>A</b>	Making fast to the bank permitted on the side of the waterway on which the sign is placed									
<b>B</b>	Obligation to making fast to the bank on the side of the waterway on which the sign is placed									
<b>C</b>	Making fast to the bank prohibited on the side of the waterway on which the sign is placed									
05 05 05-08	What is this sign?		<table border="1"> <tr> <td><b>A</b></td> <td>The order to listening a VHF radio on channel 11</td> </tr> <tr> <td><b>B</b></td> <td>The order to send a VHF radio message on channel 11</td> </tr> <tr> <td><b>C</b></td> <td>Possibility of obtaining nautical information by VHF radio on the channel 11</td> </tr> </table>	<b>A</b>	The order to listening a VHF radio on channel 11	<b>B</b>	The order to send a VHF radio message on channel 11	<b>C</b>	Possibility of obtaining nautical information by VHF radio on the channel 11	E.23 Annex 7
<b>A</b>	The order to listening a VHF radio on channel 11									
<b>B</b>	The order to send a VHF radio message on channel 11									
<b>C</b>	Possibility of obtaining nautical information by VHF radio on the channel 11									
<b>BUOYAGE AND MARKING OF THE WATERWAY</b>										
05 06 01-01	You are on the river and you can see such a signage of the fairway. Which way are you going?		<table border="1"> <tr> <td><b>A</b></td> <td>Downstream</td> </tr> <tr> <td><b>B</b></td> <td>Upstream</td> </tr> <tr> <td><b>C</b></td> <td>You cannot tell from these signs</td> </tr> </table>	<b>A</b>	Downstream	<b>B</b>	Upstream	<b>C</b>	You cannot tell from these signs	Annex 8
<b>A</b>	Downstream									
<b>B</b>	Upstream									
<b>C</b>	You cannot tell from these signs									
05 06 01-02	What does this sign mean in inland waters?		<table border="1"> <tr> <td><b>A</b></td> <td>Left-hand side of the fairway</td> </tr> <tr> <td><b>B</b></td> <td>A dangerous place</td> </tr> <tr> <td><b>C</b></td> <td>Bifurcation of the fairway</td> </tr> </table>	<b>A</b>	Left-hand side of the fairway	<b>B</b>	A dangerous place	<b>C</b>	Bifurcation of the fairway	Annex 8
<b>A</b>	Left-hand side of the fairway									
<b>B</b>	A dangerous place									
<b>C</b>	Bifurcation of the fairway									
05 06 01-03	What is this sign?		<table border="1"> <tr> <td><b>A</b></td> <td>Cross-over from left to right bank</td> </tr> <tr> <td><b>B</b></td> <td>A dangerous place</td> </tr> <tr> <td><b>C</b></td> <td>A dangerous place on the left bank</td> </tr> </table>	<b>A</b>	Cross-over from left to right bank	<b>B</b>	A dangerous place	<b>C</b>	A dangerous place on the left bank	Annex 8
<b>A</b>	Cross-over from left to right bank									
<b>B</b>	A dangerous place									
<b>C</b>	A dangerous place on the left bank									

No.	Question		Reference to CEVNI							
05 06 01-04	You are going downstream on inland waters. Which side you will pass this sign?		<table border="1"> <tr><td>A</td><td>Left</td></tr> <tr><td>B</td><td>Right</td></tr> <tr><td>C</td><td>None. It's a no entry sign</td></tr> </table>	A	Left	B	Right	C	None. It's a no entry sign	Annex 8
A	Left									
B	Right									
C	None. It's a no entry sign									
05 06 01-05	Which side you will pass this sign?		<table border="1"> <tr><td>A</td><td>North</td></tr> <tr><td>B</td><td>East</td></tr> <tr><td>C</td><td>It does not matter. It can be circumnavigated from all sides</td></tr> </table>	A	North	B	East	C	It does not matter. It can be circumnavigated from all sides	Annex 8
A	North									
B	East									
C	It does not matter. It can be circumnavigated from all sides									
05 06 03-01	What does the symbols mark in red on the map mean?		<table border="1"> <tr><td>A</td><td>West cardinal sign</td></tr> <tr><td>B</td><td>Danger point bifurcation, no light</td></tr> <tr><td>C</td><td>None of the above</td></tr> </table>	A	West cardinal sign	B	Danger point bifurcation, no light	C	None of the above	Annex 8
A	West cardinal sign									
B	Danger point bifurcation, no light									
C	None of the above									
05 06 02-01	You are going downstream on inland waters. Which side you will pass this sign?		<table border="1"> <tr><td>A</td><td>Right</td></tr> <tr><td>B</td><td>Left</td></tr> <tr><td>C</td><td>None. It's a no entry sign</td></tr> </table>	A	Right	B	Left	C	None. It's a no entry sign	5.B Annex 8
A	Right									
B	Left									
C	None. It's a no entry sign									
05 06 02-02	What is this sign?		<table border="1"> <tr><td>A</td><td>Channel near the left bank</td></tr> <tr><td>B</td><td>Channel near the right bank</td></tr> <tr><td>C</td><td>No entry</td></tr> </table>	A	Channel near the left bank	B	Channel near the right bank	C	No entry	4.B Annex 8
A	Channel near the left bank									
B	Channel near the right bank									
C	No entry									
05 06 02-03	What is this sign?		<table border="1"> <tr><td>A</td><td>Cross-over from left to right bank</td></tr> <tr><td>B</td><td>Cross-over from right to left bank</td></tr> <tr><td>C</td><td>Warning</td></tr> </table>	A	Cross-over from left to right bank	B	Cross-over from right to left bank	C	Warning	5.D Annex 8
A	Cross-over from left to right bank									
B	Cross-over from right to left bank									
C	Warning									
<b>RULES OF THE ROAD</b>										
05 07 04-01	Which side would you pass this sign by?		<table border="1"> <tr><td>A</td><td>Left</td></tr> <tr><td>B</td><td>Right</td></tr> <tr><td>C</td><td>I won't. It's a no entry sign</td></tr> </table>	A	Left	B	Right	C	I won't. It's a no entry sign	Article 6.24
A	Left									
B	Right									
C	I won't. It's a no entry sign									
05 07 04-02	You see this sign. What do you do?		<table border="1"> <tr><td>A</td><td>I will turn back; this is a no entry sign</td></tr> <tr><td>B</td><td>I will pass the span under the sign - this is the permission to go in two directions</td></tr> <tr><td>C</td><td>I will pass the span under the sign - it is the permission to go in one direction</td></tr> </table>	A	I will turn back; this is a no entry sign	B	I will pass the span under the sign - this is the permission to go in two directions	C	I will pass the span under the sign - it is the permission to go in one direction	D.1 Article 6.25(2) Annex 7
A	I will turn back; this is a no entry sign									
B	I will pass the span under the sign - this is the permission to go in two directions									
C	I will pass the span under the sign - it is the permission to go in one direction									

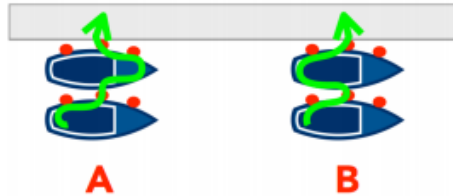
No.	Question		Reference to CEVNI						
05 07 04-03	You see this sign. What do you do? 	<table border="1"> <tr> <td>A</td> <td>I will pass the span under the sign - this is the permission to go in two directions</td> </tr> <tr> <td>B</td> <td>I will pass the span under the sign - it is the permission to go in one direction</td> </tr> <tr> <td>C</td> <td>I will turn back, this is a no entry sign</td> </tr> </table>	A	I will pass the span under the sign - this is the permission to go in two directions	B	I will pass the span under the sign - it is the permission to go in one direction	C	I will turn back, this is a no entry sign	Article 6.25(2)
A	I will pass the span under the sign - this is the permission to go in two directions								
B	I will pass the span under the sign - it is the permission to go in one direction								
C	I will turn back, this is a no entry sign								
05 07 06-01	How will the skipper of a boat pulling a water skier know that the skier is in trouble?	<table border="1"> <tr> <td>A</td> <td>He needs to be very watchful</td> </tr> <tr> <td>B</td> <td>He does not have to know that</td> </tr> <tr> <td>C</td> <td>There has to be another person on the boat constantly watching the skier</td> </tr> </table>	A	He needs to be very watchful	B	He does not have to know that	C	There has to be another person on the boat constantly watching the skier	Article 6.35(2)
A	He needs to be very watchful								
B	He does not have to know that								
C	There has to be another person on the boat constantly watching the skier								
05 07 06-02	Can you pull a water skier in a fog?	<table border="1"> <tr> <td>A</td> <td>Yes, if you know the area well</td> </tr> <tr> <td>B</td> <td>No</td> </tr> <tr> <td>C</td> <td>Yes, if the skier agrees</td> </tr> </table>	A	Yes, if you know the area well	B	No	C	Yes, if the skier agrees	Article 6.35(1)
A	Yes, if you know the area well								
B	No								
C	Yes, if the skier agrees								
05 07 02-01	Which one is a give way vessel?  	<table border="1"> <tr> <td>A</td> <td>1</td> </tr> <tr> <td>B</td> <td>2</td> </tr> <tr> <td>C</td> <td>None of them</td> </tr> </table>	A	1	B	2	C	None of them	Article 6.04
A	1								
B	2								
C	None of them								
05 07 02-02	Which one is a give way vessel?  	<table border="1"> <tr> <td>A</td> <td>1</td> </tr> <tr> <td>B</td> <td>2</td> </tr> <tr> <td>C</td> <td>None of them</td> </tr> </table>	A	1	B	2	C	None of them	Article 6.04
A	1								
B	2								
C	None of them								
05 07 02-03	Which one is a give way vessel?  	<table border="1"> <tr> <td>A</td> <td>1</td> </tr> <tr> <td>B</td> <td>2</td> </tr> <tr> <td>C</td> <td>None of them</td> </tr> </table>	A	1	B	2	C	None of them	Article 6.04
A	1								
B	2								
C	None of them								
05 07 02-04	You are overtaking a slower vessel. What kind or vessel are you?	<table border="1"> <tr> <td>A</td> <td>Give way vessel</td> </tr> <tr> <td>B</td> <td>Stand on vessel</td> </tr> <tr> <td>C</td> <td>None of the above</td> </tr> </table>	A	Give way vessel	B	Stand on vessel	C	None of the above	Article 6.10
A	Give way vessel								
B	Stand on vessel								
C	None of the above								
05 07 03-01	In what direction both vessels should turn? 	<table border="1"> <tr> <td>A</td> <td>Left</td> </tr> <tr> <td>B</td> <td>Right</td> </tr> <tr> <td>C</td> <td>Each one of them to right</td> </tr> </table>	A	Left	B	Right	C	Each one of them to right	Article 6.13
A	Left								
B	Right								
C	Each one of them to right								

No. Question

Reference to CEVNI

**BERTHING RULES**

05 08 00-01 When berthing alongside to another yacht. Which way should you choose when leaving your boat?



A	A
B	B
C	It does not matter

Chapter 7

05 08 00-02 When berthing alongside to another yacht, how would you position your yacht?



A	Like drawing A shows
B	Like drawing B shows
C	It does not matter

Chapter 7

**PREVENTION OF POLLUTION OF WATER AND DISPOSAL OF WASTE GENERATED ON BOARD VESSELS**

05 10 00-01 What can be thrown overboard when sailing:

A	Only organic waste
B	Light things that will dissolve quickly like toilet paper
C	Nothing

Article 10.04